

Name _____

Week of April 9 ~ Kindergarten; **Due: 4/13**

Bobby told Sally that he had a 4-sided shape behind his back. Sally said, "Oh, I know what you're holding! It's a square!" Is Sally correct or could it be something else? If it could be something else, what?

Answer _____

Name _____

Week of April 9 ~ Kindergarten; **Due: 4/13**

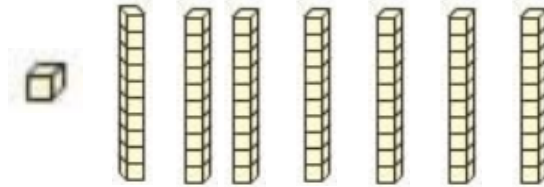
Bobby told Sally that he had a 4-sided shape behind his back. Sally said, "Oh, I know what you're holding! It's a square!" Is Sally correct or could it be something else? If it could be something else, what?

Answer _____

Name _____

Week of April 16 ~ Kindergarten: Due 4/20

Molly's teacher told her to build the number 17 with base-10 blocks and Molly built this:



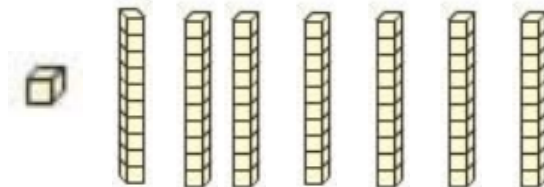
Is Molly correct? If not, what was her mistake?

Answer _____

Name _____

Week of April 16 ~ Kindergarten: Due 4/20

Molly's teacher told her to build the number 17 with base-10 blocks and Molly built this:



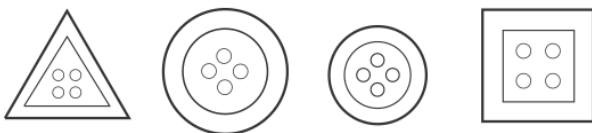
Is Molly correct? If not, what was her mistake?

Answer _____

Name _____

Week of April 23 ~ Kindergarten; Due 4/27

Greg sorted buttons and put all of these in a group. How did he sort them? Can you add a button to the group that fits in?

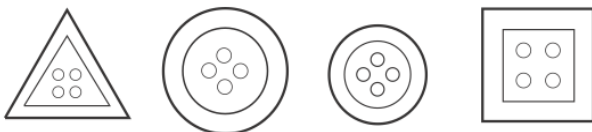


Answer _____

Name _____

Week of April 23 ~ Kindergarten; Due 4/27

Greg sorted buttons and put all of these in a group. How did he sort them? Can you add a button to the group that fits in?



Answer _____

Name _____

Week of April 30 ~ Kindergarten; Due 5/4

Amaya had 3 red balloons and 1 blue balloon. Kathy had 1 red balloon and 4 blue balloons. Who has more balloons? Explain.

Answer _____

Name _____

Week of April 30 ~ Kindergarten; Due 5/4

Amaya had 3 red balloons and 1 blue balloon. Kathy had 1 red balloon and 4 blue balloons. Who has more balloons? Explain.

Answer _____